



**ALL SAINTS'  
COLLEGE**

**Science Department**

**Year 12 Chemistry 2017**

**Acids & Bases Test**

Name: \_\_\_\_\_

Teacher: \_\_\_\_\_

**Instructions to Students:**

1. 50 minutes permitted
2. Attempt all questions
3. Write in the spaces provided
4. Show all working when required
5. All answers to be in blue or black pen, diagrams in pencil.

Multiple Choice	Short Answer	TOTAL	Final Percentage
/10	/50	/60	

**Section 1: Multiple Choice****10 marks**

Use the multiple Choice grid provided

- In which of the following equations is the substance in bold type acting as a Brønsted-Lowry base?
  - $\mathbf{NH_4^+}(aq) + OH^-(aq) \rightarrow NH_3(g) + H_2O(l)$
  - $\mathbf{CH_3NH_2}(aq) + CH_3COOH(l) \rightarrow CH_3NH_3^+(aq) + CH_3COO^-(aq)$
  - $2 \mathbf{Na}(s) + 2 H_2O(l) \rightarrow 2 Na^+(aq) + 2 OH^-(aq) + H_2(g)$
  - $\mathbf{Cr_2O_7^{2-}}(aq) + 2 OH^-(aq) \rightarrow 2 CrO_4^{2-}(aq) + H_2O(l)$
- In which one of the following reactions is water behaving as an acid?
  - $H_2O(g) + C(s) \rightarrow H_2(g) + CO(g)$
  - $H_2O(l) + NH_3(g) \rightarrow NH_4^+(aq) + OH^-(aq)$
  - $HCO_3^-(aq) + H_2O(l) \rightarrow CO_3^{2-}(aq) + H_3O^+(aq)$
  - $NH_4^+(aq) + H_2O(l) \rightarrow H_3O^+(aq) + NH_3(aq)$
- What is the conjugate acid of  $CH_3NH_2$ ?
  - $CH_3NH^-$
  - $CH_3NH^+$
  - $CH_3NH_3^+$
  - $CH_3NH_2^-$
- Which one of the following could be true in an aqueous solution of sodium hydroxide?
  - $[H^+] = [OH^-]$
  - $pH = -\log_{10} [OH^-]$
  - $pH = 1.2$
  - $pH = 12.8$

5. Which one of the following is the change in units of pH which occurs when 10.0mL of a 1.0 M solution of a strong monoprotic acid are made up to 1.0 L with water?

- a) 1
- b) 2
- c) 3
- d) 5

6. Consider the following equation, which shows the auto-ionisation of water.



If the temperature of this system is decreased, which of the following statements are **true**?

- (i) The pH of the water rises
- (ii) The water becomes less acidic
- (iii) The value of  $K_w$  becomes greater
- (iv)  $[\text{H}_3\text{O}^+]$  decreases
- (v)  $[\text{H}_3\text{O}^+] = [\text{OH}^-]$

- a) (i), (iv) and (v) only
- b) (i), (ii) and (iv) only
- c) (ii) and (iii) only
- d) (i) and (v) only

7. If equal volumes of the following pairs of  $0.1 \text{ mol L}^{-1}$  solutions were mixed, which mixture would be the least effective buffer?

- a)  $\text{Na}_2\text{HPO}_4$  and  $\text{NaH}_2\text{PO}_4$
- b)  $\text{HNO}_3$  and  $\text{Ba}(\text{NO}_3)_2$
- c)  $\text{CH}_3\text{COOH}$  and  $\text{NaCH}_3\text{COO}$
- d)  $\text{H}_2\text{CO}_3$  and  $\text{NaHCO}_3$

8. Which of the following possibilities describes the pH of a solution of the following compounds dissolved in distilled water?

	<i>Ammonium Nitrate</i>	<i>Potassium Carbonate</i>	<i>Sodium Chloride</i>	<i>Sodium Oxide</i>
a)	Less than 7	Greater than 7	Equals 7	Greater than 7
b)	Less than 7	Equals 7	Less than 7	Greater than 7
c)	Less than 7	Equals 7	Less than 7	Equals 7
d)	Equals 7	Greater than 7	Equals 7	Greater than 7

9. Adding a few drops of concentrated sodium hydroxide to a solution of ethanoic acid:

- a) increases  $[\text{CH}_3\text{COO}^-]$
- b) increases  $[\text{H}_3\text{O}^+]$
- c) increases  $[\text{CH}_3\text{COOH}]$
- d) decreases the pH

10. What mass of NaOH is required to prepare 500 mL of a solution with a pH of 12 at 25°C?

- a) 2.00 g
- b) 0.200 g
- c) 0.0400 g
- d) 4.00 g

**Section 2: Short Answers**

**50 Marks**

1. Write balanced net ionic equations (including state symbols) for the following reactions: (6)

a) A piece of copper oxide is reacted with dilute sulfuric acid.

Equation: \_\_\_\_\_  
\_\_\_\_\_

b) Some small pieces of calcium are added to dilute phosphoric acid

Equation: \_\_\_\_\_  
\_\_\_\_\_

c) Sodium hydroxide is reacted with a solution of ammonium nitrate

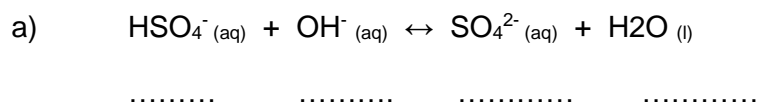
Equation: \_\_\_\_\_  
\_\_\_\_\_

2. Carbonic acid,  $\text{H}_2\text{CO}_3$ , is an example of a polyprotic acid. Using equations, describe what this means. (3)

\_\_\_\_\_  
\_\_\_\_\_  
\_\_\_\_\_  
\_\_\_\_\_

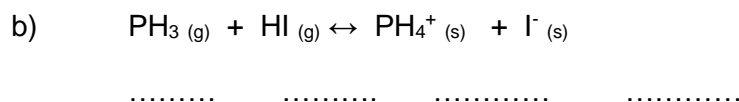
3. For each of the following equations: (9)

- i) label the acids and bases with either an "A" or "B" on the dotted lines provided
- ii) show that the acids are Lowry-Bronsted Acids with an arrow showing proton movement for both the forward and reverse reaction
- iii) state the conjugate acid/base pair and conjugate base/acid pair



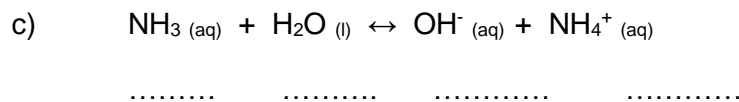
Acid & Conjugate Base pair 1: \_\_\_\_\_

Base & Conjugate Acid pair 2: \_\_\_\_\_



Acid & Conjugate Base pair 1: \_\_\_\_\_

Base & Conjugate Acid pair 2: \_\_\_\_\_



Acid & Conjugate Base pair 1: \_\_\_\_\_

Base & Conjugate Acid pair 2: \_\_\_\_\_

4. Formic acid (HCOOH) and ethanoic acid (CH<sub>3</sub>COOH) are both monoprotic acids.

The acid dissociation constants  $K_a$  and pH of 0.1 M solutions of these two acids are given below:

Acid	pH of 0.1 mol L <sup>-1</sup> solution	$K_a$ (at 25 °C)
Formic acid (HCOOH)	2.38	$1.8 \times 10^{-4}$
Ethanoic acid (CH <sub>3</sub> COOH)	2.88	$1.8 \times 10^{-5}$

- a) Using the information provided, explain why these two acids are considered to be weak acids. (2)

---

---

- b) Comparing the information given, explain the observed difference in pH values. (3)

---

---

5. Consider the following salts:  $\text{KCl}$ ,  $\text{NH}_4\text{NO}_3$ ,  $\text{LiCH}_3\text{COO}$ ,  $\text{Na}_3\text{PO}_4$ ,  $\text{NaHSO}_4$ ,  $\text{Mg}(\text{NO}_3)_2$

a) Predict whether aqueous solutions of these salts would be acidic, alkaline or neutral (6)

Acidic salt	Neutral salt	Basic salt

b) Choose two salts, one which will produce an acidic solution and one that will produce a basic solution. Write a hydrolysis equation for each. (2)

Salt producing acidic solution:

---

---

Salt producing basic solution:

---

---



6. Calculate the  $[H^+]$  and  $[OH^-]$  and pH of the following solutions at  $25^\circ C$ : (6)

a)  $0.01 \text{ mol L}^{-1} \text{ HCl}$

b)  $2 \text{ mol L}^{-1} \text{ H}_2\text{SO}_4$

c)  $0.5 \text{ mol L}^{-1} \text{ KOH}$

7. Heartburn, which is a symptom of indigestion, can be caused by elevated levels of acid in the stomach. One particular “antacid” from the pharmacy has the following information on its label:

***Each 10.0 mL dose contains 350.0 mg of solid magnesium hydroxide and 300.0 mg of solid aluminium hydroxide, suspended in water.***

**The equations for these neutralisation reactions are given below:**

This “antacid” mixture neutralises hydrochloric acid in the stomach. A patient suffering from ‘heartburn’, a condition that can be related to diet, was found to have a stomach pH of 1.7.

- a) What is the hydrogen ion concentration, in mol L<sup>-1</sup>, of the acid in the stomach? (1)
- b) Write two balanced ionic equations to show the reactions between the acid and each of the magnesium hydroxide and aluminium hydroxide compounds. (2)

- c) Assuming that the stomach volume of this person is 1.4 litres, calculate the pH of the stomach after the patient had taken 10.0 mL of the above medication. (For the purposes of this calculation, you may assume that there is no buffer system in the stomach). (9)

- d) Stomach acid also be neutralised by taking a “home remedy” of bicarbonate of soda ( $\text{NaHCO}_3$ ), in water. Using your knowledge of acid-base reactions, state what the potential “problem” with this ‘home remedy’ could be. (1)

---

---

8. Some compounds can behave as buffers, that is, they have a buffering capacity.

- a) Using only ammonium chloride ( $\text{NH}_4\text{Cl}$ ) and ammonia solution ( $\text{NH}_3$ ), state what you would have to consider to make a buffer solution. (2)

---

---

---

---

- b) Would you be able to produce a buffer using hydrochloric acid and sodium chloride? Explain your answer. (2)

---

---

- c) Explain what is meant with the term ‘buffering capacity’. (1)

---

---

**END OF TEST**